

BANK OF MAHARASTRA 09

Reasoning Ability

1. Four of the following five are alike in a certain way and so form a group. Which is the one that does not belong to that group?
a) RU
b) BE
c) FI
d) AD
e) IM
2. Four of the following five are alike in a certain way and so form a group. Which is the one that does not belong to that group?
a) 28
b) 56
c) 175
d) 112
e) 63
3. How many such pairs of letters are there in the word SEDATIVE each of which has as many letters between them in the word as in the English alphabet?
a) None
b) One
c) Two
d) Three
e) More than three
4. In a certain code CURATIVE is written as BSVDDUHS. How is STEAMING written in that code?
a) BFUTFMHL
b) TUFBFMHL
c) BFUTLHMF
d) BFUTHOJN
e) None the these
5. How many meaningful English words can be made with the letters SWNE using each letter only once in each word?
a) None
b) One
c) Two
d) Three
e) More than three
6. In a certain code language, 'when did you come' is written as 'tina kija', 'will you come- again' is written as 'napa sa ja' and 'she will go' is written as 'pa da ra'. How is 'again' written in that code language?
a) na
b) sa
c) ja
d) da
e) None of these.
7. In a certain code 'COURT' is written as '5% @ 38' and 'TILE' is written as '8@ \$4', How is 'CITE' written in that code?
a) 5\$84
b) 5%84

- c) 5084
- d) 3084
- e) None of these

8. Among P, Q, R, S and T, each having different weight, R is heavier than S but lighter than T. P is lighter than S. Who among them is the heaviest?

- a) T
- b) Q
- c) T or Q
- d) Data inadequate
- e) None of these

9. If '+' means 'subtracted from', 'x' means 'added to', '÷' means 'multiplied by' and '-' means 'divided by', then $15 + 6 \div 4 - 8 \times 5 = ?$

- a) 12
- b) 23
- c) $13\frac{11}{13}$
- d) 17
- e) None of these

10. Pointing to a girl, Arun said "She is the only daughter of my grandfather's son". How is the girl related to Arun?

- a) Daughter
- b) Sister
- c) Cousin Sister
- d) Data inadequate
- e) None of these

Directions (11-15) : Study the following arrangement carefully and answer the questions given below :

4 K @ 1 E F © 2 H D % 3 8 B I M 6 * U W Y 5 \$ 9 G J # 7 A

11. Which of the following is the eighth to the left of the nineteenth from the left end of the above arrangement?

- a) 5
- b) U
- c) D
- d) #
- e) None of these

12. How many such consonants are there in the above arrangement, each of which is immediately preceded by a letter and immediately followed by a number?

- a) None
- b) One
- c) Two
- d) Three
- e) More than three

13. Four of the following five are alike in a certain way based on their positions in the above arrangement and so form a group. Which is the one that does not belong to that group?

- a) F2©
- b) JG\$
- c) W5Y
- d) D3%
- e) 59\$

14. If all the numbers in the above 'arrangement are dropped, which of the following will be the fourteenth from the left end?

- a) M
- b) %
- c) D
- d) W
- e) None of these

15. How many such symbols are there in the above arrangement, each of which is immediately preceded by a letter and immediately followed by a number?

- a) None
- b) One
- c) Two
- d) Three
- e) More than three

Directions (16-20): In each of the questions below are given four statements followed by four conclusions numbered I, II, III & IV. You have to take the given statements to be true even if they seem to be at variance from commonly known facts. Read all the conclusions and then decide which of the given conclusions logically follows from the given statements disregarding commonly known facts.

16. Statements:

All dolls are toys. Some toys are gems. Some gems are boxes. All boxes are sticks.

Conclusions:

- I. Some sticks are gems.
- II. Some gems are dolls.
- III. Some sticks are dolls.
- IV. Some toys are dolls

- a) Only I follows
- b) Only II follows
- c) Only III and IV follow
- d) Only I and IV follow
- e) None of these

17. Statements:

Some days are nights. Some nights are weeks. All weeks are months. All months are years.

Conclusions:

- I. Some years are nights.
- II. Some years are days.
- III. Some months are rights.
- IV Some years are weeks.

- a) Only I, II and III follow
- b) Only I, III and IV follow
- c) Only II, III and IV follow
- d) All follow
- e) None of these

18. Statements:

Some doors are handles. All handles are pins. Some pins are threads. All threads are clothes.

Conclusions:

- I. Some clothes are pins.
- II. Some pins are doors.
- III. Some clothes are handles.

IV. Some clothes are doors.

- a) Only I, II and III follow
- b) Only I, II and IV follow
- c) Only II, III and IV follow
- d) All follow
- e) None of these

19. Statements:

Some papers are lamps. Some lamps are bulbs. Some bulbs are tubes. Some tubes are walls.

Conclusions:

I. Some walls are lamps:

II. Some bulbs are papers.

III. Some tubes are lamps.

IV. Some walls are papers.

- a) Only I and II follow
- b) Only III and IV follow
- c) Only I, II and III follow
- d) All follow
- e) None of these

20. Statements:

All roads are cars. No car is tree. Some trees are jungles. All jungles are rivers.

Conclusions:

I. Some rivers are roads.

II. Some jungles are roads.

III. Some cars are roads.

IV. No jungle is road.

- a) None follows
- b) Only either II or IV follows
- c) Only either II or IV and III follow
- d) Only III and IV follow
- e) Only either II or IV and I and III follow

Directions (21-25) : In each question below is given a group of letters followed by four combinations of digits/symbols numbered a), b), c) and d). You have to find out which of the combinations correctly represents the group of letters based on the following coding system and the conditions that follow and mark the number of that combination as your answer. If none of the combinations correctly represents the group of letters, mark e) i.e. 'None of these' as your answer.

Letter: M J R A D B W Z P E I H G U K

Digit/Symbol Code: 8 4 @ 9 © 1 2 S 3 # 5 6 % 7 *

Conditions: (i) If both the first and the last letters are vowels, their codes are to be interchanged

(ii) If the first letter is a consonant and the last letter is a vowel, both are to be coded as the code for the vowel.

(iii) If the first letter is a vowel and the last letter is a consonant; both are to be coded as the code for the consonant.

21. RPDAEK

- a) '@3©9#*
- b) '~3©9\$@
- c) '*3©9#*
- d) '*3©9#@
- e) None of these

22. AMZGUB

- a) 98\$%71

- b) 98\$%79
- c) 18\$%79
- d) 18\$%71
- e) None of these

23. IBHJRE

- a) #614@5
- b) 5164@#
- c) #164@5
- d) #164@#
- e) None of these

24. GDWZMI

- a) %@2\$85
- b) 52©\$85
- c) 5%©2\$8
- d) %©2\$8%
- e) None of these

25. EUBKJA

- a) #71*4#
- b) 971*4#
- c) 917*4#
- d) 971*49
- e) None of these

Directions (26-30) : Study the following information carefully and answer the questions given below:

A, B, C, D, E, F, G and H are sitting around a circle facing in the center. B is third to the right of F and third to the left of H. C is fourth to the left of A who is not an immediate neighbor of F or B. E is not an immediate neighbour of B. G is second to the right of D.

26. Who is to the immediate left of B?

- a) D
- b) G
- c) D or G
- d) Data inadequate
- e) None of these

27. Who is to the immediate right of H?

- a) A
- b) E
- c) F
- d) Data inadequate
- e) None of these

28. Which of the following pairs represents the immediate' neighbors of F?

- a) CH
- b) ED
- c) HD
- d) CE
- e) None of these

29. In which of the following pairs is the first person sitting to the immediate right of the second person?

- a) BG

- b) GA
- c) AH
- d) HE
- e) CF

30. Who is third to the left of E?

- a) A
- b) C
- c) G
- d) Data inadequate
- e) None of these

Directions (31-35) : In the following questions, the symbols *, \$, #, & and % are used with the following meaning as illustrated below:

'P \$ Q' means 'P is neither greater than nor smaller than Q'.

'P & Q' means 'P is neither greater than nor equal to Q'.

'P % Q' means 'P is neither smaller than nor equal to Q'.

'P * Q' means 'P is not smaller than Q'.

'P # Q' means 'P is not greater than Q'.

Now in each of the following question assuming the given statements to be true, find which of the conclusions I, II, III and IV given below them is/are definitely true and give your answer accordingly.

31. Statements: D * K, K % T, T & R, R # M

Conclusions:

- I. M % T
- II. D % T
- III. R % K
- IV. M # D
- a) Only I is true
- b) Only II is true
- c) Only I and II are true
- d) Only II and III are true
- e) None of these

32. Statements: F & W, W \$ V, V % B, B & D

Conclusions:

- I. F & B
- II. D & V
- III. V % F
- IV. W % D
- a) Only I is true
- b) Only I, II and III are true
- c) Only I, II and IV are true
- d) Only II, III and IV are true
- e) None of these

33. Statements: Z % N, N # K, K \$ M, M & R

Conclusions:

- I. M \$ N
- II. M % N
- III. R % N
- IV. Z % M
- a) Only either I or II is true

- b) Only either I or II and III are true
- c) Only either I or II and III and IV are true
- d) Only III is true
- e) None of these

34. Statements: F # K, K \$ T, d % T, V * D

Conclusions: I. T * F

II. D% K

III. D% F

IV. V%K

- a) Only I and II are true
- b) Only I, II and III are true
- c) Only II and III are true
- d) Only II, III and IV are true
- e) All are true

35. Statements: H \$ J, J δ Y, Y * K, K # W

Conclusions: I. W % Y

II. K δ J

III. K # H

IV. H δ W

- a) None is true
- b) Only I is true
- c) Only II is true
- d) Only III is true
- e) Only IV is true

Directions (36-40) : In each question below is given a statement followed by two assumptions numbered I and II. An assumption is something supposed or taken for granted. You have to consider the statement and the following assumptions and decide which of the assumptions is implicit in the statement.

Give answer a) if only Assumption I is implicit.

Give answer b) if only Assumption II is implicit.

Give answer c) if either Assumption I or II is implicit.

Give answer d) if neither Assumption I nor II is implicit

Give answer e) if both Assumptions I and II are implicit.

36. Statement: Mohan requested his mother to arrange for food for about thirty persons as he invited all his friends to celebrate his birthday.

Assumptions:

I. Most of Mohan's friends may come to his house on his birthday.

II. There may not be more than thirty who may attend Mohan's birthday party.

37. Statement: A very large number of aspiring students applied for admission to the professional courses run by the renowned college in town.

Assumptions:

I. All the applicants may be able to get admission to the college.

II. The admission process adopted by the renowned college may be fair to all the applicants.

38. Statement: The state administration banned gathering of more than fifty people at any place during the visit of foreign dignitaries to the city.

Assumptions:

I. People may avoid gathering at any place in the city during the period of visit of foreign dignitaries.

II. Many people may ignore the prohibitory orders and gather to get a glimpse of the dignitaries.

39. Statement

The Govt. decided to levy toll tax of Rs. 100/- for every vehicle using the super highway connecting the two big cities of the state.

Assumptions:

I. Majority of the vehicles travelling between these two cities may not use the super highway.

II. Govt. may not be able to recover the cost incurred for constructing the super highway from the toll tax collection.

40. Statement: The teachers of all the degree colleges went on an indefinite strike in protest against the Govt.'s decision for postponing pay revision to next year.

Assumptions:

I. The Govt. may suspend all the striking teachers.

II. The Govt. may revise the pay of the college teachers in the current year.

Directions (41-50) : In each of the questions given below which one of the five answer figures on the right should come after the problem figures on the left, if the sequence were continued?

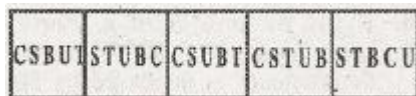

PROBLEM FIGURES

ANSWER FIGURES

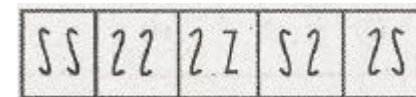

41.



42.



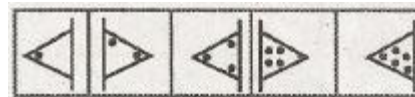
43.



44.



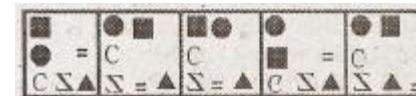
45.



46.



47.



48.



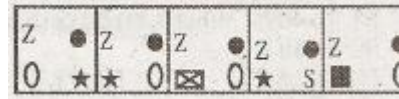
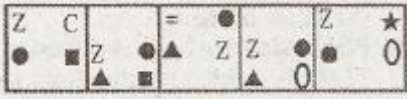
a) b) c) d) e)

49.



a) b) c) d) e)

50.



a) b) c) d) e)

Quantitative Aptitude

Directions (51-55) : What should come in place of question mark n) in the following questions?

51. $58.621 - 13.829 - 7.302 - 1.214 = ?$

- a) 37.281
- b) 35.272
- c) 36.276
- d) 31.254
- e) None of these

52. $450 \text{ of } ? \% + 285 \text{ of } 46\% = 257.1$

- a) 34
- b) 32
- c) 21
- d) 28
- e) None of these

53. $(81)^4 \div (9)^5 = ?$

- a) 6561
- b) 729
- c) 81
- d) 9
- e) None of these

54. $618 + 62 \times 0.50 - 29 = ?$

- a) 625
- b) 660
- c) 640
- d) 655
- e) None of these

55. $282 \times 82 \times 0.2 = ?$

- a) 4624.8
- b) 4734.6
- c) 4604.4
- d) 4324.2
- e) None of these

Directions (56-66) : In the following number series only one number is wrong. Find out the wrong number.

56. 3 7 16 35 72 153 312

- a) 7
- b) 153
- c) 35
- d) 72
- e) 16

57. 18 20 23 32 48 73 109

- a) 20
- b) 23
- c) 32
- d) 48
- e) 73

58. 7 4 5 9 20 51 160.5

- a) 4
- b) 5
- c) 9
- d) 20
- e) 51

59. 6 10 14 34 66 130 258

- a) 10
- b) 14
- c) 34
- d) 66
- e) 130

60. 2 7 30 138 524 1557 3102

- a) 7
- b) 30
- c) 138
- d) 524
- e) 1557

61. What is 45% of 25% of $\frac{4}{5}$ th of 850?

- a) 67.5
- b) 83.5
- c) 69.5
- d) 76.5
- e) None of these

62. Prabha started a business investing Rs. 32,000/-. After 5 months Amit joined her with a capital of Rs. 22,000/-. At the end of the year the total profit was Rs. 16,409/-. What is Prabha's share of the profit?

- a) Rs. 5,284/-
- b) Rs. 11,712/-
- c) Rs. 10,182/-
- d) Rs. 4,697/-
- e) None of these

63. The simple interest accrued on an amount of Rs. 16,500/- at the end of three years is Rs. 5,940/- What would be the compound interest accrued on the same amount at the same rate in the same period ? (rounded off to two digits after decimal)

- a) Rs. 6681.31
- b) Rs. 6218.27
- c) Rs. 6754.82
- d) Rs. 6537.74
- e) None of these

64. The sum of four consecutive even numbers is 44. What is the sum of the squares of these numbers?

- a) 288
- b) 502
- c) 696
- d) 920
- e) None of these

65. Which number should replace both the question marks in the following equation?

$$\frac{?}{144} = \frac{16}{?}$$

- a) 124
- b) 56
- c) 48
- d) 32
- e) None of these

66. Prerna decided to donate 15% of her salary to an orphanage. On the day of donation she changed her mind and donated Rs. 1,896/- which was 80% of what she had decided earlier. How much is Prerna's salary?

- a) Rs. 18,500/-
- b) Rs. 10,250/-
- c) Rs. 15,800/-
- d) Cannot be determined
- e) None of these

67. If $3\frac{2}{3}$ is subtracted from 9, 9 and the difference is multiplied by 450, what is the final answer?

- a) 2,250
- b) 2,045
- c) 2,540
- d) Cannot be determined
- e) None of these

68. If the numerator of a fraction is increased by 600% and the denominator is increased by 200% .

The resultant fraction is $2\frac{4}{5}$. What was the original fraction?

- a) $\frac{4}{7}$
- b) $\frac{13}{12}$
- c) $\frac{11}{12}$
- d) $\frac{6}{5}$
- e) None of these

69. By how much is $\frac{3}{5}$ th of 845 greater than 3rd of 333?

- a) 175
- b) 285

- c) 238
- d) 209
- e) None of these

70. The ages of Trisha and Shalini are in the ratio of 7 : 6 respectively. After 8 years the ratio of their ages will be 9 : 8
What is the difference in their ages?

- a) 4 years
- b) 8 years
- c) 10years
- d) 12years
- e) None of these

Directions (71-75) What **approximate** value should come in place of the question mark (?) in the following questions?
(Note: You are not expected to calculate thy exact value.)

71. $839.999 \div 48.007 = ?$

- a) 9.5
- b) 23.5
- c) 11.5
- d) 28.5
- e) 17.5

72. $\sqrt{8000} = ?$

- a) 76
- b) 89
- c) 65
- d) 97
- e) 58

73. $18.001 \times 22.999 \times 9.998 = ?$

- a) 4560
- b) 6290
- c) 4140
- d) 5920
- e) 5080

74. $99999 \div 99 \div 9 = ?$

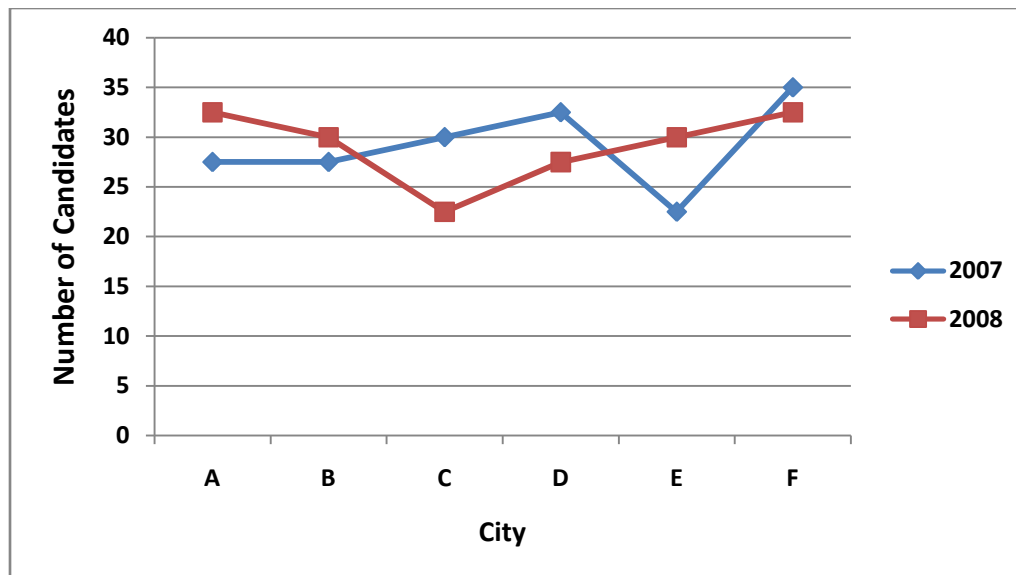
- a) 112
- b) 211
- c) 121
- d) 221
- e) 222

75. $7984.986 + 2541.005 + 127.996 = ?$

- a) 11280
- b) 15600
- c) 14650
- d) 10650
- e) 16500

Directions (76-80) : Study the following graph carefully to answer the questions.

Number of Candidates Appearing for an Entrance Test from Various Cities (Number in Lakhs)



76. What is the respective ratio of the number of candidates appearing for the Entrance Test from city A and city D in the year 2008?
- 11 : 12
 - 13 : 11
 - 12 : 11
 - 11 : 13
 - None of these
77. What is the **approximate** average number of candidates appearing for the Entrance Test from all the cities together in the year 2007?
- 2800000
 - 2901000
 - 2755000
 - 2795000
 - 2917000
78. The number of candidates appearing for the Entrance test from city B in the year 2008 is **approximately** what percent of the number of candidates appearing for the Entrance test from city C in the same year?
- 75
 - 112
 - 124
 - 133
 - 97
79. What is the respective ratio of the number of students appearing for the Entrance Test from cities A, B and C together in the year 2007 to the number of students appearing for the Entrance Test from cities D, E and F together from the same year?
- 18: 17
 - 13:14
 - 17:18
 - 17 : 13
 - None of these
80. The number of candidates appearing for the Entrance Test from city E in the year 2008 is what percent of the total number of candidates appearing for the Entrance Test from all the cities together in that year (rounded off to two digits after decimal)?

- a) 17.14
- b) 15.43
- c) 20.31
- d) 14.49
- e) None of these

Directions (81-85) : Study the information carefully to answer the following questions.

An urn contains 5 red, 3 green, 2 blue and 4 yellow marbles.

81. If two marbles are picked at random, what is the probability that both are blue?

- a) $\frac{1}{7}$
- b) $\frac{1}{14}$
- c) $\frac{2}{81}$
- d) $\frac{1}{28}$
- e) None of these

82. If three marbles are picked at random, what is the probability that one is green and two are yellow?

- a) $\frac{3}{14}$
- b) $\frac{2}{91}$
- c) $\frac{9}{182}$
- d) $\frac{7}{545}$
- e) None of these

83. If three marbles are picked at random, what is the probability-that either both are red or both are green

- a) $\frac{5}{7}$
- b) $\frac{5}{14}$
- c) $\frac{1}{7}$
- d) $\frac{1}{14}$
- e) None of these

84. If four marbles are picked at random, what is the probability that at least one is red?

- a) $\frac{18}{143}$
- b) $\frac{6}{91}$
- c) $\frac{9}{14}$
- d) $\frac{7}{143}$
- e) None of these

85. If three marbles are picked at random, what is the probability that at least one is yellow?

- a) $\frac{2}{7}$
- b) $\frac{4}{91}$
- c) $\frac{27}{143}$
- d) $\frac{61}{91}$
- e) None of these

Directions (86-90) : Study the following table carefully to answer the questions that follow.

Number of Students Appeared (A) and Failed (F) in Five Classes of a School over the Years

Year	Classes									
	VI		VII		VIII		IX		X	
	A	F	A	F	A	F	A	F	A	F
2002	68	12	67	09	75	11	84	07	78	09
2003	65	19	70	11	63	08	69	05	79	12
2004	75	06	62	13	69	07	70	06	65	17
2005	79	12	76	10	67	13	81	05	74	08
2006	63	10	87	14	82	12	64	16	63	12
2007	72	15	66	04	74	15	70	07	82	04
2008	60	05	60	07	77	05	71	06	75	06

86. What is the total number of failed students from class VIII for the given years?

- a) 77
- b) 83
- c) 68
- d) 71
- e) None of these

87. What is the ratio of the total number of passed students to total number of failed students for the year 2005?

- a) 139 : 24
- b) 239 : 48
- c) 90 : 11
- d) 325 : 42
- e) None of these

88. Which of the following class has the minimum number of failed students over the years?

- a) VI
- b) VII
- c) VIII
- d) IX
- e) X

89. What if the number of passed students, for all the classes together, in the year 2007?

- a) 319
- b) 337
- c) 350
- d) 326
- e) None of these

90. What is the overall percentage of passed students over appeared of class IX from all the years together (rounded off to two digits after decimal)?

- a) 75.95
- b) 81.36
- c) 79.53
- d) 86.94
- e) 89.78

Directions (91-95) : Study the table carefully to answer the questions that follow.

**Total number of 24500 people who are engaged in given professions and (of these)
Percentage of females and males**

Professions	Percentage of People	Percentage of Females	Percentage of Males
Medical	11	60	40
Engineering	18	30	70
Law	24	45	55
Teaching	21	80	20
Banking	16	35	65
Management	10	44	56

91. What is the respective ratio of the total males in Medical and Teaching profession together to the total number of females in the same professions together?

- a) 117 : 43
- b) 29 : 183
- c) 183:29
- d) 43 : 117
- e) None of these

92. The total number of people in Teaching profession is what percent of the total number of people in law profession?

- a) 87.5
- b) 93
- c) 68
- d) 79.5
- e) None of these

93. What is the total number of males from all the professions together?

- a) 11472
- b) 12784
- c) 12348
- d) 12453
- e) None of these

94. Females in Engineering profession are what percent of the males in Management profession? (Rounded off to two digits after decimal)

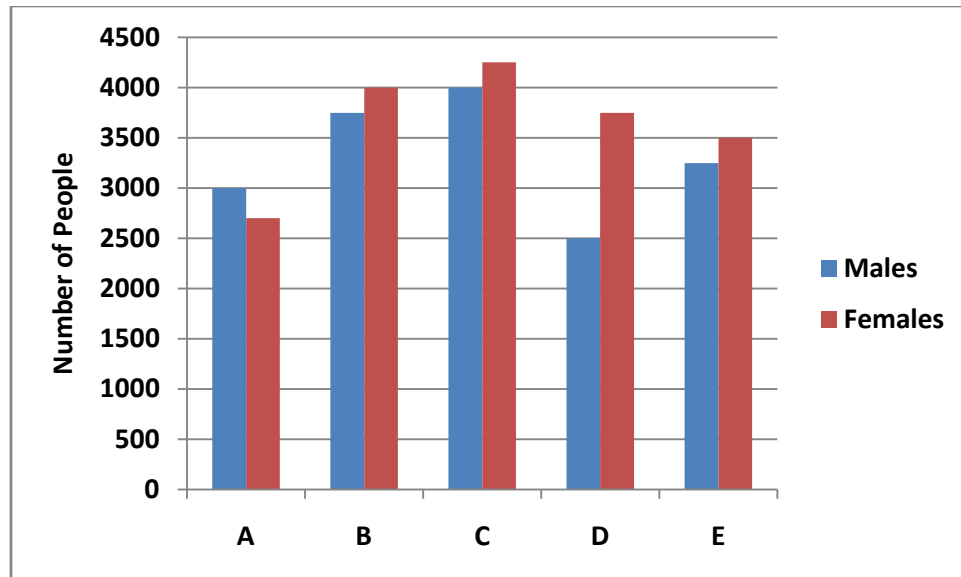
- a) 71.71
- b) 96.43
- c) 83.16
- d) 68.54
- e) None of these

95. What is the respective ratio of the number of males in Banking profession to the number of males in Engineering profession?

- a) 17: 7
- b) 28.: 25
- c) 7 : 11
- d) 63 : 52
- e) None of these

Directions (96-100) : Study the following graph carefully to answer the questions that follow.

Total Number of Males and Females in Five Different Organizations



96. What is the average number of females from all the Organizations together?

- a) 3800
- b) 3550
- c) 3300
- d) 3150
- e) None of these

97. The number of males from Organization A is approximately what percent of the total number of males from all the Organizations together?

- a) 18
- b) 28
- c) 11
- d) 31
- e) 36

98. What is the difference between the total number of females and the total number of males from all the Organizations together?

- a) 1500
- b) 1750
- c) 1800
- d) 2050
- e) None of these

99. What is the respective ratio of number of females from Organization C to the number of females from Organization E?

- a) 14 : 17
- b) 17 : 14
- c) 14 : 15
- d) 15 : 14
- e) None of these

100. The total numbers of males from Organizations A & B together are approximately what percent of the total number of males from Organizations C, D and E together?

- a) 58
- b) 75
- c) 69

- d) 83
- e) 52

General Awareness

101. Which of the following is NOT a measure to control Inflation adopted by the Government and/or RBI?

- a) Monetary Policy
- b) Fiscal Policy
- c) Financial Inclusion
- d) Price Control
- e) Bank Rate Policy

102. As we all know the Wholesale Price Index is divided in five main commodity groups. Which of the following is NOT considered separately as a group while calculating Wholesale Price Index (WPI)?

- a) Services and/or Production by Public Sector Units
- b) Agriculture
- c) Import & Exports
- d) Mining
- e) Manufacturing

103. In terms of the economics, the total value of the output (goods and services) produce a and income received in a year by domestic residents of a country put together is called-

- a) Net National Product
- b) Gross National Product
- c) Gross National Income
- d) National Income
- e) None of these

104. As per the reports in various newspapers/magazines India could not achieve the target of industrial growth fixed in tenth five year plan. What was the target fixed for the same?

- a) 12%
- b) 115
- c) 10%
- d) 8%
- e) None of these

105. Which of the following schemes was launched a few years back to provide wage employment to the rural people in India (The programme is being run successfully in addition to NREGA)?

- a) Indra Awas Yojana
- b) Accelerated Rural Water Supply Programme
- c) Total Sanitation Campaing
- d) Sampoorna Gramnen Rozgar Yojana
- e) Pradhan Mantri Gram Sadak Yojana.

106. Which of the following is TRUE about the Rajiv Gandhi National Drinking Water Mission?

- (A) To provide safe drinking water in urban slums
 - (B) To provide sustainable safe drinking water in rural areas
 - (C) To provide sustainable and safe drinking water in those parts of the country where ample water is not available like coastal areas and desert areas
- a) Only A
 - b) Only B
 - c) Only C
 - d) All A, B & C
 - e) None of these

107. The minimum support price of which of the following was announced as Rs. 1,080/- a quintal for current year's Rabi Crops (2008-09)?

- a) Gram
- b) Paddy
- c) Wheal
- d) Sugarcane
- e) None of these

108. Which of the following is TRUE about the India-USA agreement on developing gas resources?

(A) Both the nations will cooperate in exploiting gas hydrates in Krishna, Godavari and Mahanadi basins and deep sea of Andaman.

(B) USA will help in establishment of an IIT exclusively for research and training in the areas of gas technology

(C) India will send its experts to find out more gas reserves in various parts of USA particularly in deep sea of Alaska as they have special training in the same.

- a) Only A
- b) Only B
- c) Only C
- d) All A, B & C
- e) None of these

109. As per the news reports in various news papers/magazines which of the following sectors of the Indian economy has slipped into Negative Growth during the last quarter of 2008-09?

- a) Services Sector
- b) Agriculture Sector
- c) Industrial sector
- d) Energy Sector
- e) None of these

110. Rural sanitation programme of the Central Govt. is a very popular programme in India. Which of the following was/were the objectives of the same?

(A) To provide home sanitation

(B) To provide disposal of garbage

(C) To provide wage employment to poor of society in rural areas

- a) Only A
- b) Only B
- c) Only C
- d) Both A & B
- e) All A, B & C

111. Which of the following is/are true about the economy of China?

(A) China as a country is rich but Chinese are not so.

(B) China's growth strategy has been based mainly on exports.

(C) Despite attaining rapid growth and Also bringing millions of people out of poverty, China remains a poor country.

- a) Only A
- b) Only B
- c) Only C
- d) Both A & B
- e) All A, B & C

112. How much growth rate per annum India needs if it has to eradicate its poverty in next 25 years?

- a) 6%
- b) 9%

- c) 8%
- d) 7%
- e) 10%

113. The energy policy of India says that energy security can be ensured by augmenting the domestic energy resource base and by maintaining reserves equivalent to the oil imports sufficient for

- a) 15 days
- b) 90 days
- c) 60 days
- d) 30 days
- e) one year

114. Who amongst the following is the author of the book "What I require from Life"?

- a) J.B.S. Haldane
- b) Nirupam Sen
- c) Sonal Shah
- d) Sonia Gandhi
- e) Manmohan Singh

115. Which of the following is/are major reforms the Govt. has introduced in Banking Sector?

- (A) Dismantling the complex system of interest rate controls.
 - (B) Eliminating prior approval of the RBI for large loans.
 - (C) Introduction of capital adequacy norms and few other prudential norms
- a) Only A
 - b) Only B
 - c) Only C
 - d) All A, B & C
 - e) None of these

116. Which of the following is/are recent trends noticed in Indian economy that have raised concern about food security, farmer's income and poverty?

- (A) Slowdown in growth in agriculture sector
 - (B) Widening economic disparities between irrigated and rain fed areas
 - (C) Increased non-agricultural demand for land and water as a result of fast urbanization
- a) Only A
 - b) Only B
 - c) Only C
 - d) All A, B & C
 - e) None of these

117. As per the report in various news papers/magazines etc. the agricultural productivity in India is low in comparison to other countries. What are the main reasons of the same?

- (A) Lack of credit and marketing facilities
 - (B) Uneconomic holdings
 - (C) Outdated agricultural techniques
- a) Only A
 - b) Only B
 - c) Only C
 - d) Both A
 - e) All A, B & C

118. An insurance scheme for the agriculture sector was introduced by the Govt. of India. Which of the following represents the name of the same?

- a) NAIS
- b) RIDF
- c) AICIL
- d) CACP
- e) None of these

119. Which of the following ministries lays down the policies and programmes for the development and regulation of the country's water resources?

- a) Ministry of Rural Development
- b) Ministry of Agriculture
- c) Ministry of Environment and Forests
- d) Ministry of Tribal Affairs
- e) Ministry of Water Resources

120. Which of the following phenomenon is also-known as climatic Migration?

- a) White Revolution
- b) Green Revolution
- c) Global Warming
- d) Urbanization
- e) None of these

121. The G-20 is grouping of world's most powerful 20 countries. In terms of economic representation, what percentage of world's economy is represented by G-20 nations?

- a) 50%
- b) 60%
- c) 85%
- d) 70%
- e) None of these

122. The Prime Minister of which of the following countries - of Indian subcontinent had to face a very serious threat to democracy and to his/her own life by the mutiny staged by the paramilitary forces and other such organization of the country recently?

- a) Nepal
- b) Pakistan
- c) Myanmar
- d) Bangladesh
- e) None of these

123. Which of the following countries suffers from chronic food shortage and having people on the brink of starvation refused to have food aid from USA as it wants to be a self reliant nation?

- a) North Korea
- b) Sudan
- c) Uganda
- d) Brazil
- e) India

124. India is a permanent Member of which of the following organizations?

- a) NATO
- b) Non Aligned Movement
- c) G-8
- d) OPEC
- e) None of these

125. Which of the following organizations has brought a report on World development with the theme "Reshaping Economic Geography"?

- a) World Trade Organization
- b) World Bank
- c) United Nations Organization
- d) Asian Development Bank
- e) None of these

126. Which of the following commission is formed in order to guard against predatory and collusive behavior of the business organizations and protect the interest of business organizations in order to promote economic efficiency in the country?

- a) Knowledge Commission
- b) Farmers Commission
- c) Administrative Reforms Commission
- d) Labour Commission
- e) Competition Commission

127. Which of the following is correct about the Rajiv Gandhi Grameen Vidyutikaran Yojana?

- (A) The scheme was launched in few backward states only.
 - (B) The aim of the scheme was to provide electricity to all villages having a population of 5000 and above.
 - (C) The scheme achieved its target in less than 10 years time.
- a) Only A
 - b) Only B
 - c) Only C
 - d) All A, B & C
 - e) None of these

128. Who amongst the following is the author of the book "The score of my Life"?

- a) A. P. J. Abdul Kalam
- b) Javed Akhtar
- c) Deepa Narayan
- d) Zubin Mehta
- e) None of these

129. The decade 2001 -2010 is being observed as decade of which of the following by the SAARC?

- a) Rights of the women
- b) Rights of the children
- c) Rights of the Senior citizens
- d) Rights of the Animals
- e) None of these

130. Which of the following states won the 17th Senior National Women's Football Championship play in 2009?

- a) West Bengal
- b) Orissa
- c) Manipur
- d) Karnataka
- e) Tamil Nadu

131. Players in which of the following games/sports are taking special training for the Asian Cups 2011 in India as they wish to make it a big success?

- a) Cricket
- b) Hockey
- c) Football

- d) Badminton
- e) None of these

132. Gigabyte Communications has launched its business in India in a big way by bringing G Smart touch screen mobile phones./ Gigabyte is a-

- a) Chinese firm
- b) US firm
- c) British firm
- d) Japanese firm
- e) Taiwanese firm

133. Some agro processing units make an advance agreement with the farmers and decide to purchase the entire production of certain fruits, vegetables and medicinal plants on an agreed upon cost/price. This type of arrangement is known as ____

- a) Import farming
- b) Crop farming
- c) Adoptive farming
- d) Loan farming
- e) Contract farming

134. Who amongst the following is the winner of the Phalke Ratna Award given away on the occasion of the 140th Birth Anniversary of Dadasahab Phalke?

- a) Manoj Kumar
- b) Shashi Kapoor
- c) Ashok Kumar (Posthumously)
- d) Amitabh Bachchan
- e) None of these

135. Who amongst the following is the author of the book "If cricket is a Religion, Sachin is God"?

- a) Rajdeep Sardesai
- b) Rajeesh Shukla
- c) Chinnappa Reddy
- d) Khushwant Singh
- e) None of these

136. General Rookmangud Katawal whose name was in the news is from which of the following countries?

- a) Ghana
- b) Pakistan
- c) Myanmar
- d) Nepal
- e) None of these

137. Which of the following agreements have taken place between Russia and India in recent past?

- (A) Both countries conducted joint defense exercises.
 - (B) India has sent around 3000 bio/agri engineers to redevelop a 300 sq. kms. desert area in Russia.
 - (C) Russia is supplying nuclear fuel for India's Koodankoolam Nuclear plant.
- a) Only A
 - b) Only B
 - c) Only C
 - d) Both A & C only
 - e) Both A & B only

138. US President Barack Obama has made an appeal to the people of which of the following countries asking them to shift away from decades of confrontation and start a new era of friendship?

- a) Iran
- b) Pakistan
- c) Russia
- d) China
- e) None of these

139. India's first fully dedicated University for Humanities is established in

- a) Lucknow
- b) Delhi
- c) Jaipur
- d) Mumbai
- e) Hyderabad

140. Thousands--of Indians--were migrated to which of the following countries under its Highly Skilled Migrant Programme (HSMP) which was in news recently?

- a) Britain
- b) Australia
- c) New Zealand
- d) Canada
- e) None of these

141. Who amongst the following won the Barcelona Open Tennis Title Finals which were held in April 2009?

- a) Leyton Hewitt
- b) Novak Djokovic
- c) Rafael Nadal
- d) David Ferrer
- e) None of these

142. Which of the following countries won the Azlan Shah Hockey Cup after a gap of 13 years?

- a) India
- b) Malaysia
- c) South Korea
- d) Iran
- e) Pakistan

143. National Food Security Management scheme was launched by the Govt. of India to achieve which of the following?

- (A) Demonstration of improved production technology
 - (B) Distribution of high yield variety seeds
 - (C) To distribute fertilizer subsidy to farmers directly in cash
- a) Only A
 - b) Only B
 - c) Only C
 - d) Both A & B
 - e) All A, B & C

144. What is the full form of CFSA as used in financial sectors?

- a) Corporation of Farmers and Subsidiary Allocation
- b) Committee on Financial Sector Assessment
- c) Committee on Farming Sector and Agronomy
- d) Commission to Float Scientific Agriculture
- e) None of these

145. Govt. of India is planning to impose safeguard duty on the goods imported from -

- a) China
- c) Brazil
- b) USA
- d) Pakistan
- e) Japan

146. DGM Trophy is associated with the game of -

- a) Hockey
- b) Cricket
- c) Badminton
- d) Golf
- e) Football

147. Which of the following terms is NOT used in cricket?

- a) Hoops
- b) Maiden over
- c) Stumped
- d) Hattrick
- e) Gulleys

148. Who is the author of the book "To a Hunger Free World"?

- a) A.P.J. Abdul Kalam
- b) Sonia Gandhi
- c) L.K. Advani
- d) M.S. Swaminathan
- e) None of these

149. China's efforts to divert which of the following rivers have created an atmosphere of concerns in India and Bangladesh?

- a) Padma
- b) Brahmaputra
- c) Ravi
- d) Satlej
- e) None of these

150. India recently signed an agreement in the field of energy with a country, which is considered world leader in the field of "renewable energy". Which is that country?

- a) Britain
- b) China
- c) Japan
- d) Italy
- e) Spain

English Language

Directions (151-165) : Read the following passage carefully and answer the questions given below it. Certain words have been printed in **bold** to help you locate them while answering-some of the questions.

Crude oil has had a long history, and an interesting one. It is probably one single natural resource that has been **instrumental** in producing maximum conflicts and wars during the last century. With such a track record, it is surprising that in the given environment, wherein oil prices are breaking all records, and has become the biggest cause of concern across the globe, why is it that there is silence from some parts of the world? It is intriguing especially when some have been paying a much higher price on fuel, as compared to their poorer counterparts. It is surprising, more so, when one

realizes that the number of oil producing nations is only a handful as compared to the number of oil consuming nations. While a **proactive** action from the mighty and powerful can bring in a huge respite for the world, why is it that they choose to be silent? Also, keeping in mind the fact that a few nations- both powerful and weak have some of the largest unused oil reserves, their silence and lack of any serious action look all the more **aberrant**. Looking at the manner things are shaping up, it just cannot be ruled out that possibly **these nations have a definite interest in the increasing prices of oil**. The question then is what could their underlying interest be?

In all probability, what we are seeing right now is just a precursor to the larger picture, well laid out by them may be for the good. With rising prices, the OPEC might be delighted right now, but perhaps they are unable to see what is going to hit them. For this unprecedented rise in oil is creating a most demanding environment for alternative fuels. As and when the reserves deplete and demand really grows, more than anyone else, it is OPEC that would be badly hit, much to the **glee** of some nations having unused reserves which have the most to gain by 'using blackmailing tactics'. Eventually, the countries at the receiving end would be forced to create an enabling environment for alternative energy. This trend is already visible, with India showing the way with its nuclear deal and other countries **dangling the carrot** of complete conversion to natural gas towards other countries in order to boost their own business. By doing so they are creating tactical pressure on countries. As they know that the further the oil prices get **pushed**, the more the globe would become attracted and ready for alternative and non-conventional fuel. Moreover, for many of the countries, it might become more expensive to invest in newer technologies -to conform to the emission norms that to shift to alternative sources, making the market even more attractive. And it is then that the organizations which have already invested billions of dollars in alternate fuels would **mop up** the global energy market completely.

The second possible reason why some nations of the world are not too enthusiastic to **mitigate** the price of oil is because the rising oil price is perhaps one of the major deterrents to growth of other countries. Perhaps they were hand in glove in the mechanism to raise the oil price and knowing well that this would make these nations feel the -pinch. And now, the rising oil prices have put these nations in a fix. As the pressure of inflationary tendencies increases these countries cannot afford either to sit back and remain entrapped in the larger conspiracy. No wonder then that these are frantically loosing around the globe especially Africa-for newer reserves! As it is said, oil has a long history and the legacy continues.

151. What, according to the passage, is the step that the nations are likely to take with an intolerable rise in oil prices?

- a) Shift to alternate forms of energy
- b) Come to a state of war with other nations
- c) Put tactical pressure on countries having oil reserves
- d) Formulate more stringent emission norms and apply these across the globe
- e) None of these

152. Why is the author surprised with the stance which various nations have taken pertaining to the current global oil crisis?

- a) The stance is leading to way among the nations for control over oil fields
- b) Powerful nations have been selling oil at a very inflated rate to under developed nations
- c) Many nations have shifted to alternate forms of energy boycotting the use of oil due to inflated prices
- d) Even though oil has been a matter of conflict among the nations earlier, many nations have kept a silence on the current crisis
- e) None of these

153. Which nations does the author refer to in the phrase '**these nations have a definite interest in the increasing prices of oil**'?

- a) The mighty and powerful nations
- b) Nations having unused oil reserves
- c) Nations which have exhausted their oil reserves
- d) The nations which have shifted to non-conventional fuels
- e) None of these

154. Which of the following is not true in context of the passage?

- a) Some nations have kept a silence upon the rising oil price in order to inhibit the growth of other nations

- b) It is more cost effective to shift to alternate forms of energy than to invest in technology for conforming to the emission norms
- c) Some nations have unused oil reserves which would earn these nations heavy profits once the oil reserves elsewhere deplete
- d) India has had a nuclear deal for its energy needs
- e) All are true

155. What does the author mean by '**dangling the carrot**' in the passage?

- a) Some countries, are stringently opposing the conversion to alternate forms of fuel.
- b) Some countries have been luring other countries to change over to alternate fuels in order to boost their own business.
- c) Some countries are making the effort to save environment by using natural gas instead of oil as a fuel
- d) Both a) and b)
- e) None of these.

156. Which of the following is **intended** in the given passage?

- a) To highlight the plight of OPEC with rising fuel prices
- b) To urge to the government to shift from oil to natural gas since it is more environment friendly
- c) To highlight the vested interest of some nations in maintaining the indifference to rising oil prices
- d) To urge to save the environment by conforming to the emission norms and using alternate energy sources
- e) None of these

157. Why, according to the author, OPEC though delighted currently, would be in a difficult situation later?

- a) All the oil reserves on the earth will soon be exhausted
- b) Powerful nations will try and dominate OPEC later on
- c) As the oil reserves which are being used currently deplete in the time to come, nations having unused oil reserves would arm-twist OPEC
- d) Nations will lose faith in OPEC owing to very high fuel prices
- e) None of these

158. What, according to the author, makes the market of alternate sources very attractive?

- a) Many countries have already made a substantial profit in the industry of alternate fuel
- b) Such measure do not cause harm to the environment
- c) Only a few countries of the world will have the access to alternate forms of fuel
- d) The use of alternate sources has been forced upon certain countries by powerful countries
- e) None of these

159. Which of the following can be the most appropriate title for the given passage?

- a) Reasons behind silence on increase in oil prices
- b) Nuclear power as an alternate source of energy
- c) The monopoly of oil reserves by powerful countries
- d) The repercussion of shifting to alternate forms of energy
- e) Oil reserves as deterrent for growth of the nations.

Directions (1.60-162) : Choose the word/group of words which is most similar in meaning to the word printed in **bold** as used in the passage.

160. **INSTRUMENTAL**

- a) Non-vocal
- b) Reasonable
- c) Creditable
- d) Responsible
- e) Liable

161. **ABERRANT**

- a) Curious
- b) Abnormal
- c) Spoilt
- d) Inferior
- e) Nonfunctional

162. **PUSHED**

- a) Dominated
- b) Pressed
- c) Diverted
- d) Thrown
- e) Increased

Directions (163-165) : Choose the word/ group of words which is most opposite in meaning to the word printed in **bold** as used in the passage.

163. **PROACTIVE**

- a) Quick
- b) Over powered
- c) Dormant
- d) Delicate
- e) Brittle

164. **GLEE**

- a) Disappointment
- b) Dishonor
- c) Appreciation
- d) Disillusion
- e) Defeat

165. **MITIGATE**

- a) Fright
- b) Decline
- c) Degeneration
- d) Worsen
- e) Deprivation

Directions (166-175) : Read each sentence to find out whether there is any grammatical error in it. The error, if any, will be in one part of the sentence, the number of that part will be the answer. If there is no error, mark e) as the answer. (Ignore errors of punctuation, if any.)

166. The merchant counted/a) the number of pearls/b) to make sure that/c) none of them were missing/d) No error/e).

167. When deep sea diving/a) one should always take care/b) that oxygen cylinder is/c) tied to the back tightly/d) No error/e).

168. As the salary/a) did not match/b) his expectations, he did not/c) accept the job/d) No error/e).

169. The reason behind his success/a) in the recent past/b) is due to hard-work/c) and presence of mind/d) No error/e).

170. No sooner did the students/a) seen the principal approach/b) than they ran/c) from the playground/d) No error/e).

171. My elder sister and I am/a) interested in painting/b) and therefore have joined/c)the coaching classes/d) No error/e).

172. Only after a lot of persuasion/a) the illiterate villager allowed/b) himself girl child/c) to study in the school/d) No error/e).

173. The need for alternate/a) sources of energy are/b) essential to conserve/c) the environment/d) No error/e).

174. I have being working/a) in that organization for five years/b) but now I work/c) for a different company/d) No error/e).

175. There is no argument against/a) the fact that/b) humans are the most intelligent/c) of all other species/d) No error/e).

Directions (176-180) : Which of the phrases a), b), c) and d) given below each statement should replace the phrase printed in **bold** in the sentence to make it grammatically correct? If the sentence is correct as it is given and 'No correction is required', mark e) as the answer.

176. Many **students waits anxiously** at the college gate to know their results.

- a) student waited anxiously
- b) students waiting anxiously
- c) students waited anxiously
- d) students waited anxious
- e) No correction required

177. Through a fortuitous circumstance Rakhi met her childhood friend on the bus in which **she was travelling**.

- a) she was travelled
- b) she did travel
- c) she has travelling
- d) she were travelling
- e) No correction required

178. The opposition party has alleged that the prices of essential commodities are soaring like never **before on the last** three decades.

- a) before on the next
- b) before in the last
- c) before at the last
- d) previously in the next
- e) No correction required

179. The salaries and the perks of the employees in this institution **are not in according** with the rest of the industry.

- a) are not in accordance
- b) is not in accordance
- c) are not according
- d) is not on accordance
- e) No correction required

180. The soldiers deployed in the town **were instructed to exercising** restraint and handle the situation peacefully.

- a) was instructed to exercising
- b) were instructed for exercise
- c) were instructed to exercise
- d) was instructing to exercising
- e) No Correction required

Directions (181-185) : Rearrange the following sentences (A), (B), (C), (D), (E) and (F) to make a meaningful paragraph and then answer the questions which follow:

- (A) The only way in which this problem can be solved is by making artificial blood which has remained a distant dream for science.
(B) Donation of blood is considered to be the most noble of all the charities.
(C) If they succeed, it would be noted as one of the most important inventions in the history of mankind.
(D) This is because this donated magic potion can give life to another person in an emergency.
(E) A group of scientists, however, has dedicated themselves towards making this a reality.
(F) A growing problem however is that the requirement for safe blood is increasing whereas the number of donors is decreasing.

181. Which of the following sentence should be the **FIRST** after rearrangement?

- a) A
- b) B
- c) C
- d) D
- e) E

182. Which of the following sentence should be the **SECOND** after rearrangement?

- a) A
- b) B
- c) C
- d) D
- e) E

183. Which of the following sentence should be the **THIRD** after rearrangement?

- a) A
- b) B
- c) C
- d) D
- e) E

184. Which of the following sentence should be the **FIFTH** after rearrangement?

- a) A
- b) B
- c) C
- d) D
- e) E

185. Which of the following sentence should be the **SIXTH (LAST)** after rearrangement?

- a) A
- b) B
- c) C
- d) D
- e) E

Directions (186-190) : Each question below has two blanks, each blank indicating that something has been omitted. Choose the set of words for each blank that best fits the meaning of the sentence as a whole.

186. One of the TV cameramen was _____ in the leg by a bullet when he was _____ in the middle of a gun fight between two gangs.

- a) hurt, entered

- b) shot, caught
- c) injured, came
- d) stabbed, trapped
- e) beaten, engulfed

187. Although the fire was very small everyone _____ and reshed out of the cinema hall _____ complete chaos.

- a) shouted, leading
- b) died, producing
- c) injured, resulting
- d) scared, making
- e) panicked, causing

188. The _____ of pesticides and fertilizers while growing the vegetables and fruits is one of the greatest _____ to the health these days.

- a) production, dangers
- b) consumption, problem
- c) overuse, threats
- d) application, rewards
- e) amount, injury

189. The group's mission is to _____ peace between the nations and help different people _____ each other better.

- a) maintain, understand
- b) remain, address
- c) keep, interact
- d) advise, find
- e) communicate, friendly

190. History _____ the kings and influential leaders whereas the real 'battle was _____ by the soldiers who remain little known and celebrated in the texts.

- a) remembers, played
- b) highlights, underwent
- c) biased, lead
- d) glorifies, fought
- e) writes, done

Directions (191-200) : In the following passage there are blanks, each of which has been numbered. These numbers are printed below the passage and against each, five words are suggested one of which fits the blank appropriately. Find out the appropriate word in each case.

Without doubt there is one thing **(191)** to all of us-We have played a game at some time in our lives. Most of us play to relax or have fun, but for many playing a game or a sport is a way to **(192)** poverty behind. In fact, in many African countries, playing a sport professionally can **(193)** the lives of a person's entire family.

For example, in the small town of Bekoji, in Ethiopia **(194)** than a hundred boys and girls can be seen running at dawn every day. Each of these youth is **(195)** and serious and their coach is **(196)** that one of them will be a world champion. This seems like an idle **(197)** but it is virtually a guarantee in this small community **(198)** mainly farmers. Many of the fastest male and female distance runners in the world hail from this small town. A small hand-painted sign which greets visitors outside Bekoji **(199)** "Welcome to the village of Athletes". Children here start running at an early age, **(200)** great distances to fetch water and firewood or to reach school. At the Olympics runners from this small town are likely to win more medals than those from developed countries. 'It will give their families a way out of poverty.

191.

- a) accepted
- b) common

- c) alike
- d) similar
- e) popular

192.

- a) alleviate
- b) forgot
- c) prevent
- d) reduce
- e) leave

193.

- a) changes
- b) arrange
- c) control
- d) transform
- e) shift

194.

- a) further
- b) more
- c) greater
- d) over
- e) larger

195.

- a) concentrated
- b) rival
- c) focused
- d) playful
- e) performed

196.

- a) convince
- b) optimist
- c) intended
- d) privilege
- e) confident

197.

- a) boast
- b) suspicion
- c) risk
- d) worship
- e) precaution

198.

- a) existing
- b) that
- c) comprising
- d) consisting
- e) for

199.

- a) warn
- b) inform
- c) notices
- d) reads
- e) wish

200.

- a) covering
- b) driving
- c) measuring
- d) following
- e) competing

ANSWERS

Q.1	E	Q.32	D	Q.63	A	Q.94	B
Q.2	B	Q.33	B	Q.64	E	Q.95	E
Q.3	E	Q.34	E	Q.65	C	Q.96	E
Q.4	A	Q.35	A	Q.66	C	Q.97	A
Q.5	C	Q.36	E	Q.67	E	Q.98	B
Q.6	B	Q.37	B	Q.68	D	Q.99	B
Q.7	C	Q.38	A	Q.69	B	Q.100	C
Q.8	C	Q.39	B	Q.70	A	Q.101	C
Q.9	D	Q.40	B	Q.71	E	Q.102	A
Q.10	D	Q.41	C	Q.72	B	Q.103	B
Q.11	E	Q.42	D	Q.73	C	Q.104	C
Q.12	C	Q.43	D	Q.74	A	Q.105	E
Q.13	B	Q.44	B	Q.75	D	Q.106	B
Q.14	D	Q.45	E	Q.76	B	Q.107	C
Q.15	E	Q.46	C	Q.77	E	Q.108	A
Q.16	D	Q.47	B	Q.78	D	Q.109	B
Q.17	B	Q.48	A	Q.79	C	Q.110	E
Q.18	E	Q.49	B	Q.80	A	Q.111	B
Q.19	E	Q.50	C	Q.81	E	Q.112	B
Q.20	C	Q.51	C	Q.82	C	Q.113	B
Q.21	A	Q.52	D	Q.83	C	Q.114	C
Q.22	D	Q.53	B	Q.84	A	Q.115	D
Q.23	C	Q.54	E	Q.85	D	Q.116	D
Q.24	E	Q.55	A	Q.86	D	Q.117	E
Q.25	B	Q.56	D	Q.87	B	Q.118	E
Q.26	A	Q.57	A	Q.88	D	Q.119	E
Q.27	B	Q.58	E	Q.89	A	Q.120	C
Q.28	D	Q.59	B	Q.90	E	Q.121	C
Q.29	E	Q.60	C	Q.91	D	Q.122	D
Q.30	C	Q.61	D	Q.92	A	Q.123	A
Q.31	C	Q.62	B	Q.93	C	Q.124	B

Q.125	B	Q.144	B	Q.163	C	Q.182	D
Q.126	E	Q.145	A	Q.164	A	Q.183	E
Q.127	E	Q.146	E	Q.165	D	Q.184	D
Q.128	D	Q.147	A	Q.166	B	Q.185	C
Q.129	B	Q.148	D	Q.167	A	Q.186	B
Q.130	C	Q.149	B	Q.168	E	Q.187	E
Q.131	C	Q.150	E	Q.169	C	Q.188	C
Q.132	E	Q.151	A	Q.170	B	Q.189	A
Q.133	E	Q.152	D	Q.171	A	Q.190	D
Q.134	A	Q.153	B	Q.172	C	Q.191	B
Q.135	E	Q.154	B	Q.173	B	Q.192	E
Q.136	D	Q.155	B	Q.174	A	Q.193	D
Q.137	D	Q.156	C	Q.175	D	Q.194	B
Q.138	A	Q.157	C	Q.176	C	Q.195	C
Q.139	B	Q.158	C	Q.177	E	Q.196	E
Q.140	A	Q.159	A	Q.178	B	Q.197	A
Q.141	C	Q.160	D	Q.179	A	Q.198	C
Q.142	A	Q.161	B	Q.180	C	Q.199	D
Q.143	D	Q.162	E	Q.181	B	Q.200	A